

Relating Times Past and To the Hour

How many minutes past the hour does this clock show?

How could you figure out the number of minutes to the next hour?



I could count on from 48 to 60 or I could count back from 60.

Write numbers to complete these two ways of reading this time.

minutes past o'clock minutes to o'clock


 Loop the numbers on this clock that show the number of minutes past the hour.



Figure out how many minutes it is to the next hour.

Complete these to show two ways of reading digital time.









minutes past o'clock minutes to o'clock





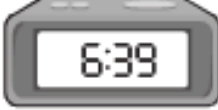
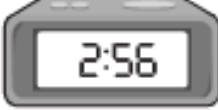
This activity relates times past and to the hour. The number of minutes past the hour and the number of minutes to the next hour make a total of 60 minutes.

Relating Times Past and To the Hour

1. Write the number of minutes past the hour and the number of minutes to the next hour. Then write the time on the digital clock.

<p>a.</p> 	<p><input type="text"/> minutes past <input type="text"/></p> <p><input type="text"/> minutes to <input type="text"/></p>	
<p>b.</p> 	<p><input type="text"/> minutes past <input type="text"/></p> <p><input type="text"/> minutes to <input type="text"/></p>	
<p>c.</p> 	<p><input type="text"/> minutes past <input type="text"/></p> <p><input type="text"/> minutes to <input type="text"/></p>	
<p>d.</p> 	<p><input type="text"/> minutes past <input type="text"/></p> <p><input type="text"/> minutes to <input type="text"/></p>	

3. Complete these.

<p>a.</p>  <p><input type="text"/> minutes to <input type="text"/></p>	<p>b.</p>  <p><input type="text"/> minutes to <input type="text"/></p>
<p>c.</p>  <p><input type="text"/> minutes to <input type="text"/></p>	<p>d.</p>  <p><input type="text"/> minutes to <input type="text"/></p>



This activity relates times past and to the hour. The number of minutes past the hour and the number of minutes to the next hour make a total of 60 minutes.